

Student Document

Lesson 2.4.3

QUESTION: 1

Scenario: You drive in a rural area and this light remains on in your dashboard.




What does this mean?

Answer:

Refer to if wrong answer:

Lesson 2.4.2

QUESTION: 2



What is the meaning of this warning light?

Answer:

Refer to if wrong answer:

Lesson 2.2.5

QUESTION: 3

Scenario: You are driving in the city and these lights come on in your dashboard.



What should you do ?

Answer:

Refer to if wrong answer:

Lesson 2.2.5

QUESTION: 4

Scenario: You are driving on the highway and this light **comes on** in your dashboard.



What should you do?

Answer:

Refer to if wrong answer:

Lesson 2.2.5

QUESTION: 5



What is the meaning of this warning light?

Answer:

Refer to if wrong answer:

Lesson 2.2.2

QUESTION: 6



What does this pictogram represent?

Answer:

Refer to if wrong answer:

Lesson 2.4.1

QUESTION: 7




Describe in your words, what this part do?

Answer:

Refer to if wrong answer:

Lesson 2.1.2

QUESTION: 8



What is the purpose of this command?


Answer:

Refer to if wrong answer:

Lesson 2.2.4

QUESTION: 9

Scenario: Your vehicle has been parked for a few days. **Before starting your engine**, you turn the ignition key to the "ON" position.



What should be the **minimum** voltage reading on the voltmeter?

Answer:

Refer to if wrong answer:

Lesson 2.5.4

QUESTION: 10

Scenario: You drive your tractor **without semi-trailer** "bobtail".



What should be the **approximate air pressure reading** on the suspension air pressure gauge?

Answer:

Refer to if wrong answer:

Lesson 2.2.4

QUESTION: 11



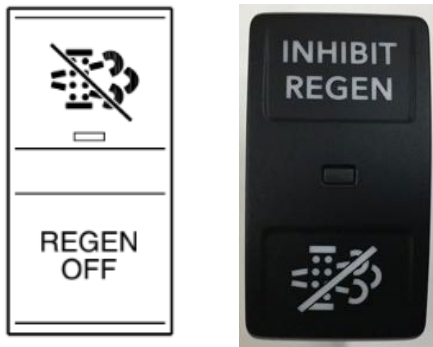
What is the purpose of this switch?

Answer:

Refer to if wrong answer:

Lesson 2.2.5

QUESTION: 12



In your own words explain the purpose of these switches?

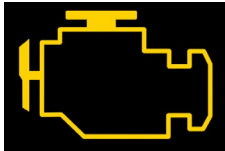
Answer:

Refer to if wrong answer:

Lesson 2.2.5

QUESTION: 13

Scenario: You are driving in the city and this light **comes on** in your dashboard.



What should you do?

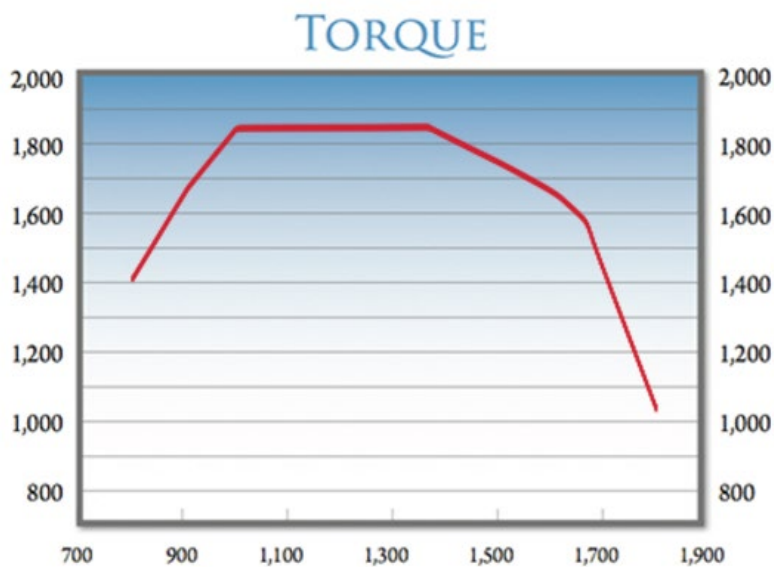
Answer:

Refer to if wrong answer:

Leçon 2.2.7

QUESTION: 14

Looking at the engine torque curve below, **the engine torque of 1830 lb/ft** is available over what rpm **range**.



Answer:

Refer to if wrong answer:

Lesson 2.3.4

QUESTION: 15



This warning light is illuminated in your dashboard. What does it mean?

Answer:

Refer to if wrong answer:

Lesson 2.2.5

QUESTION: 16



In your words explain the **2 functions** of this 3-way switch?

Answer:

Refer to if wrong answer:

Lesson 2.3.4

QUESTION: 17

Scenario: You must engage the inter-axle (power divider) locking device on your vehicle.

Give **2** conditions prior to engage the inter-axle.

Answer:

Refer to if wrong answer:

Lesson 2.3.4

QUESTION: 18

Scenario: You must engage the inner wheel (Diff lock) locking device on your vehicle.

Give **2** condition prior to engage the inner wheel.

Answer:

Refer to if wrong answer:

Lesson 2.4.3

QUESTION: 19

Scenario: You descend a **long** steep downhill with a heavily loaded vehicle.



Give **3** actions to do before the descent.

Answer:

Refer to if wrong answer:

Leçon 2.2.7

QUESTION: 20

Scenario: You are driving in the city and this light **comes on** in your dashboard.



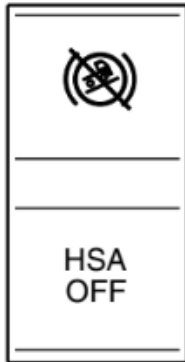
What should you do ?

Answer:.

Refer to if wrong answer:

Lesson 2.3.3

QUESTION: 21



What is the purpose of this switch?

Answer:

Refer to if wrong answer: