

Review

Multiple choice question

Sheet to be completed - 1

Lesson: 2.2.2

QUESTION:

Which pictogram represents the coolant temperature?

ANSWER CHOICE: Only one possible answer **X**
Several possible answers

A)



B)







C)



D)



Refer to if wrong answer:

QUESTION: Which pictogram is associated with low coolant levels?	
ANSWER CHOICE: Only one possible answer X Several possible answers	
A)	
B)	
C)	
D)	
Refer to if wrong answer:	

Multiple choice question

Sheet to be completed -

3 Lesson: 2.2.2

QUESTION:

What are the normal operating temperatures of the cooling system?



ANSWER CHOICE: Only one possible answer **X**
Several possible answers

A) 180 °F et 205 °F

B) 190 °F et 245 °F

C) 100 °F et 150 °F

D) 200 °F et 300 °F

Refer to if wrong answer:

Multiple choice question

Sheet to be completed -

4 Lesson: 2.2.2

QUESTION:

What is the purpose of the engine fan switch?



ANSWER CHOICE: Only one possible answer **X**
Several possible answers

A) Cooling the turbocharger

B) Cool the interior of the cabin

C) Turn on the fan manually

D) Turning on the engine brakes

Refer to if wrong answer:

True or False

Sheet to be completed -

5 Lesson: 2.2.2

QUESTION:

It is recommended, to add coolant when the coolant level is low.

ANSWER CHOICES:

TRUE	
FALSE	

Refer to if wrong answer:

Multiple choice question

Sheet to be completed -

6 Lesson: 2.2.2

QUESTION: 6

When is the best time to add coolant?

ANSWER CHOICE: Only one possible answer **X**
Several possible answers

A) When the liquid is hot to have the right level

B) When the liquid is cold

C) When the liquid is warm to avoid thermal shock with the new liquid

D) When the fan is on

Refer to if wrong answer:

Multiple choice question

Sheet to be completed -

7 Lesson: 2.2.2

QUESTION:

While driving your truck this light come on in the dashboard. What should you do?



ANSWER CHOICE: Only one possible answer **x**
Several possible answers

A) Do nothing

B) Stop the vehicle to check the coolant level in the transparent tank.

C) Put on the engine brakes

D) Stop the vehicle do a regeneration.

Refer to if wrong answer:

True or False

Sheet to be completed -

8 Lesson: 2.2.2

QUESTION:

It is normal for the air conditioning to be activated. When you select the windshield defroster.

ANSWER CHOICES:

TRUE	
FALSE	

Refer to if wrong answer:

Multiple choice question

Sheet to be completed -

9 Lesson: 2.2.2

QUESTION:

What's important to consider, before adjusting the coolant level?

ANSWER CHOICE: Only one answer possible
Several possible answers **X**

A) The engine must be cold.

B) Do not mix the different types of liquid.

C) The manufacturer's instructions must be followed.

D) Never exceed the maximum level.

E) All of the above.

Refer to if wrong answer:

Multiple choice question

Sheet to be completed -

10 Lesson: 2.2.2

QUESTION: 11

The air conditioning is represented by which pictogram?

ANSWER CHOICE: Only one possible answer **X**
Several possible answers

A) A lightning bolt.

B) A snowflake.

C) A person who is cold.

D) A wave.

Refer to if wrong answer:

Multiple choice question

Sheet to be completed -

11 Lesson: 2.2.2

QUESTION:

Identify the gauge associated to the cooling system?

ANSWER CHOICE: Only one possible answer X
Several possible answers

A)



B)



C)



D)



Refer to if wrong answer:

Multiple choice question

Sheet to be completed -

12 Lesson: 2.2.2

QUESTION:

The purpose of the cooling system is to:

ANSWER CHOICE: Only one answer possible
Several possible answers **X**

A) Ensure the rapid warm-up of the engine

B) Maintain a constant operating temperature

C) To make air conditioning.

D) Avoid overheating of the engine

Refer to if wrong answer: