

**Competency 6**  
**6.8**  
**Preventive Recovery 1/2**

Par: Alain Lévesque



## Lesson Objective(s):

Recover the competency elements not acquired in previous lessons 6.1, 6.2, 6.4, 6.6, and 6.9.  
Review of competency elements



## Reference tools:

- Randy McNally International Atlas
- Google Maps + student workbook
- Montreal & surroundings Map Art
- Quebec Trucking Network



# 1. What is the shipper's reference number

**Answer:**

1.7. LOCAL, TOUT PROJET

Mirabel (Québec) J7J 1B1

Téléphone : (450) 435-0167

Télécopieur : (450) 435-0933

3. No ref. expéditeur/Shipper's ref. no.	<b>978685</b>
5. No ref. transporteur/Carrier's ref. no.	<b>Nir : R-543051-8</b>





## 2. What is the name of the consignee

Answer:



Tracy, QC J3K 1M6

F. Consignataire (nom et adresse) / Consignee (name & address)

London International Airport  
1750 Crumlin Rd,  
London, ON N5V 3B6

3. Partie à notifier - Courier en douane / Notify party - Customs broker



ISAAC OnTheGo



10



10:21

Message reçu: 2099-02-05 8:22 admin

Assignment de voyage

Étape de voyage 1: Cueillette

POINTE AUX TREMBLES QC H5R 4E9

Transcontinental Métropolitain

12300 Boul Métropolitain E,

Coord. GPS: 45.651970, -73.522825

Contact: 1-800-436-1234

Numéro de voyage: 78398-283749

Miles: 22

Références: B/L 8973635

Remorque#: 5380



Accepter

Refuser

Instructions: Départ du CFTR Joliette 1025 maisonneuve, Joliette, QC

Consignataire: Cascades Containerboard Packaging, Schenectady, NY

DOUANES: Champlain, NY





### 3. What is your starting point?

Answer:

Instructions: Départ du CFTR Joliette 1025 maisonneuve, Joliette, QC  
Carrington, Canada, Carthage, New York, Schenectady, NY







4. What is the name of the customs office where you will need to cross ?

Answer:

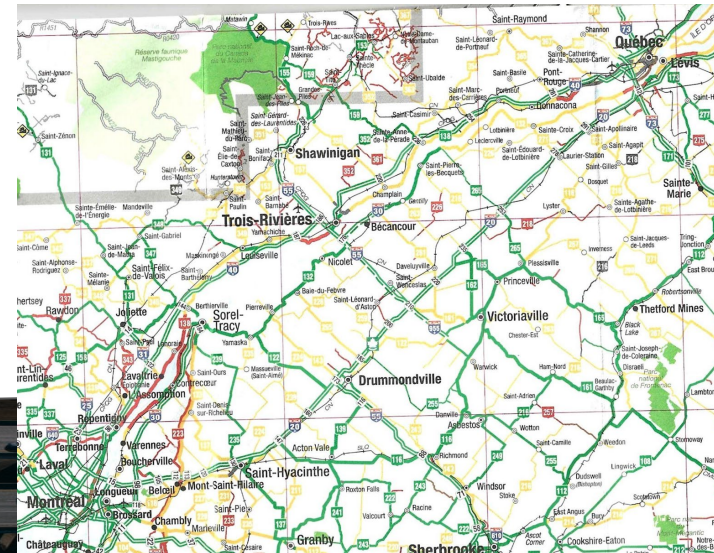
**DOUANES: Champlain, NY**



5. On Highway 20, determine the distance between the exit south of the Louis-H-Lafontaine tunnel bridge (exit 90) and the exit to access the Pierre-Laporte bridge in Quebec City (exit 312N)

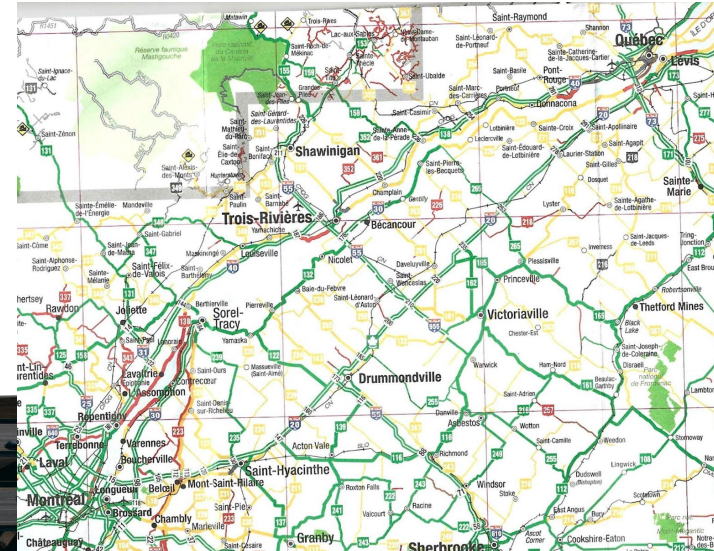
Answer:

$$312 \text{ km} - 90 \text{ km} = 222 \text{ km}$$



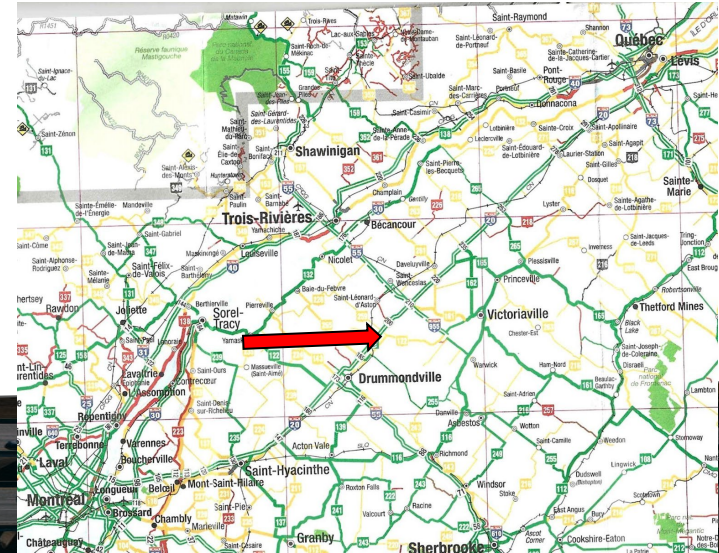
## 6. Where are routes numbered starting with 200 geographically located?

Answer: **Au sud du fleuve**



# 7. In Quebec, what is the orientation axis of even-numbered roads from their starting point?

Answer: **Ouest en Est**





8. Determine the designation of the following roads:

A. 35            **Autoroute Sud-Nord**

A. 640            **Autoroute déviatrice ouest-est**

A. 520            **Autoroute collectrice ouest-est**

A. 573            **Autoroute collectrice sud-nord**

A. 105            **Route nationale sud-nord**



9. What is the distance between the city of Gaspé and the city of Montreal?

Answer: **entre 919 et 920 km**

**DISTANCES ROUTIÈRES**

DISTANCES ROUTIÈRES															
Baie-Comeau															
679															
Chibougamau															
*572	648	DRUMMONDVILLE													
Gaspé															
*296	1215	821													
GATINEAU															
*850	770	296	1119												
GRANBY															
*647	722	79	897	281											
Joliette															
*642	664	156	906	244	151										
Lac-Mégantic															
*599	704	173	848	449	179	279									
La Malbaie															
*270	544	302	*541	586	377	373	329								
La Tuque															
530	415	231	929	449	306	249	345	396							
Les Îles-de-la-Madeleine (Cap-aux-Meules)															
*675	*1441	*1046	*817	*1344	*1121	*1131	*1073	*763	*1254						
Matagami															
*1262	608	876	1692	673	856	789	1024	1161	1037	*1919					
Matane															
*10	928	555	287	831	610	620	562	*235	643	*669	1408				
Mont-Laurier															
*889	638	334	1152	176	315	247	483	619	496	*1378	542	866			
Montmagny															
*329	602	206	619	506	283	293	235	227	316	*842	1081	330	539		
MONTREAL															
*671	703	114	920	87	82	71	250	402	289	*1046	782	634	240	307	
Natashquan															
602	1284	*447	*1046	1458	*1249	*1245	*1201	*873	1132	*1220	1864	*554	*1491	*875	*1273



10. Using the Trucking Network map, give the meaning of this sign

Answer? **À l'approche d'une  
pente raide**



11. Using the Trucking Network map, give the meaning of this sign

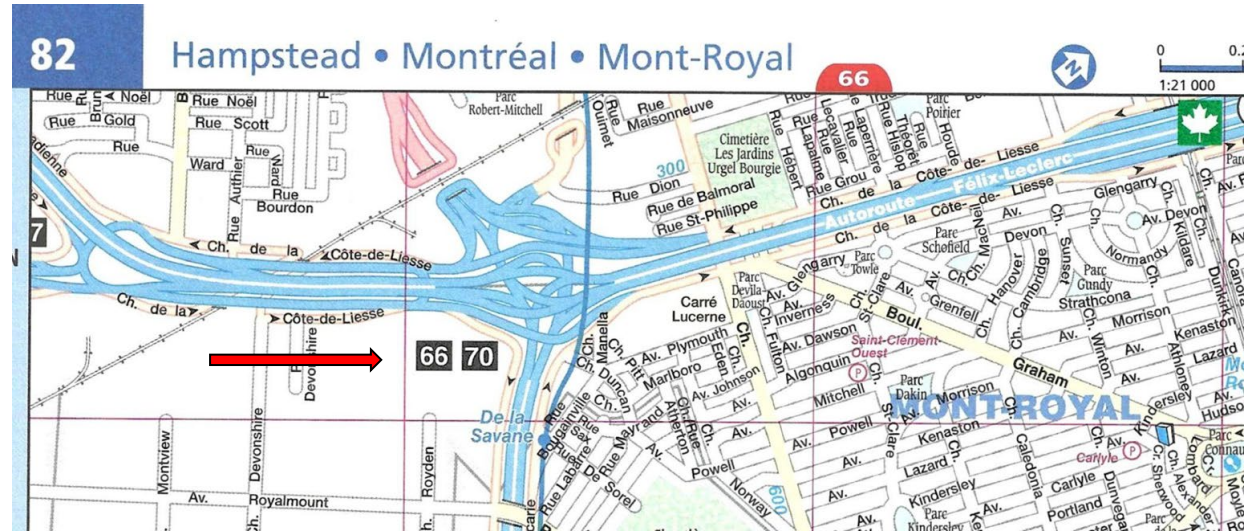
Answer: **Runaway truck ramp**



12. You are driving on Highway 40 East and you want to head onto Highway 15 South. Which exit should you take?

Answer:

exit 66



13. Which highways serve the Samuel De Bridge?

Answer :

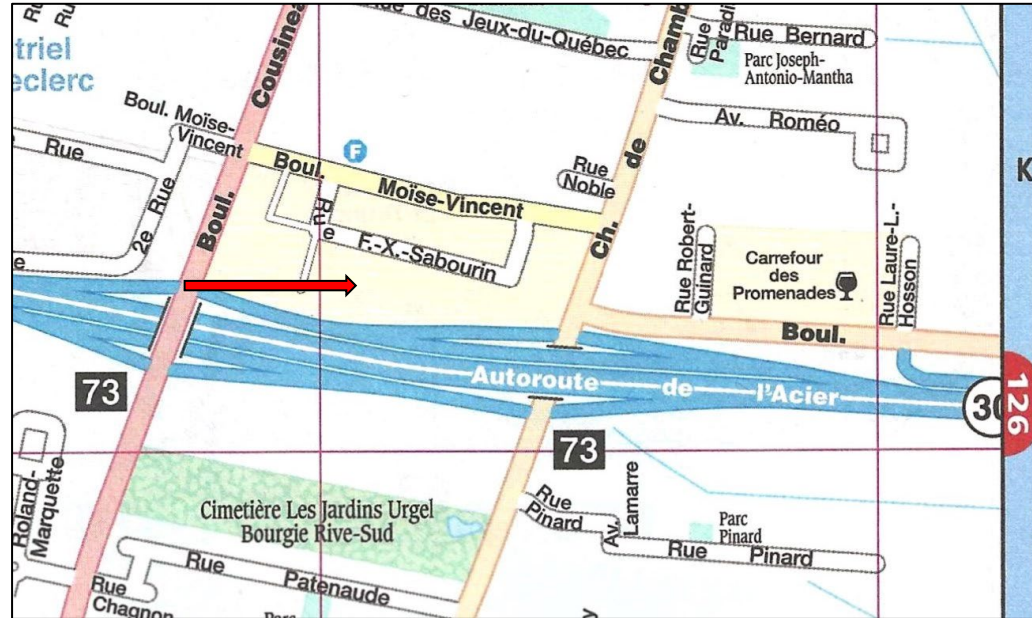
**Autoroute 10, 15, 20**





# 14. What color are industrial zones?

Answer: **Beige**



15. On which pages can you find the locator map used to identify the starting and ending points?

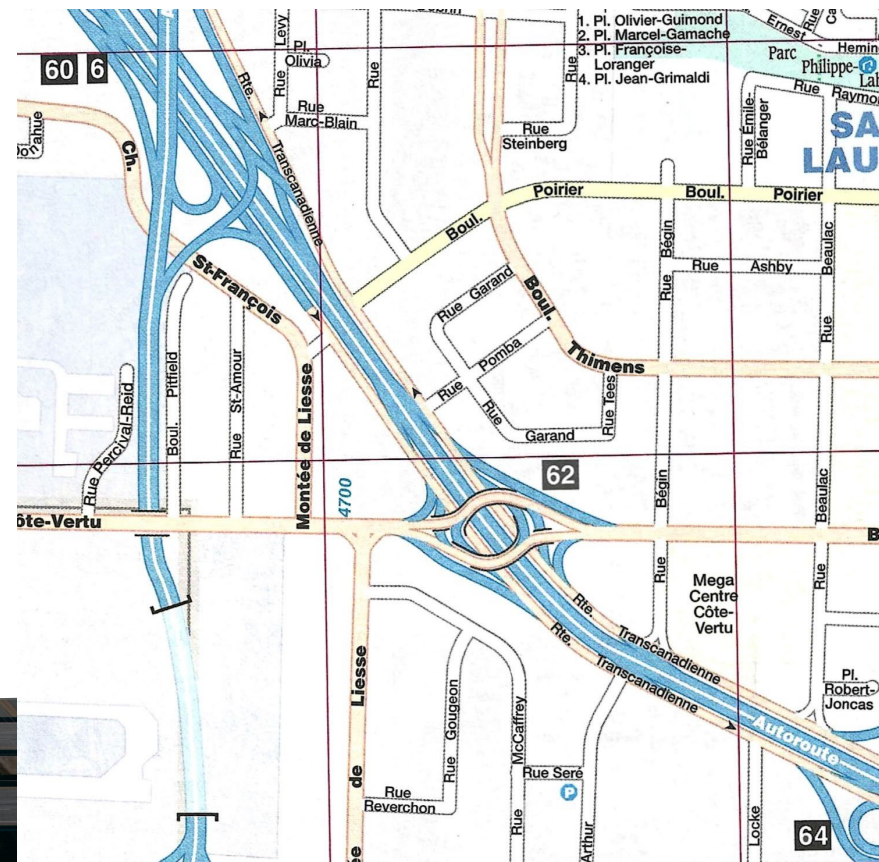
Answer: P. II-III





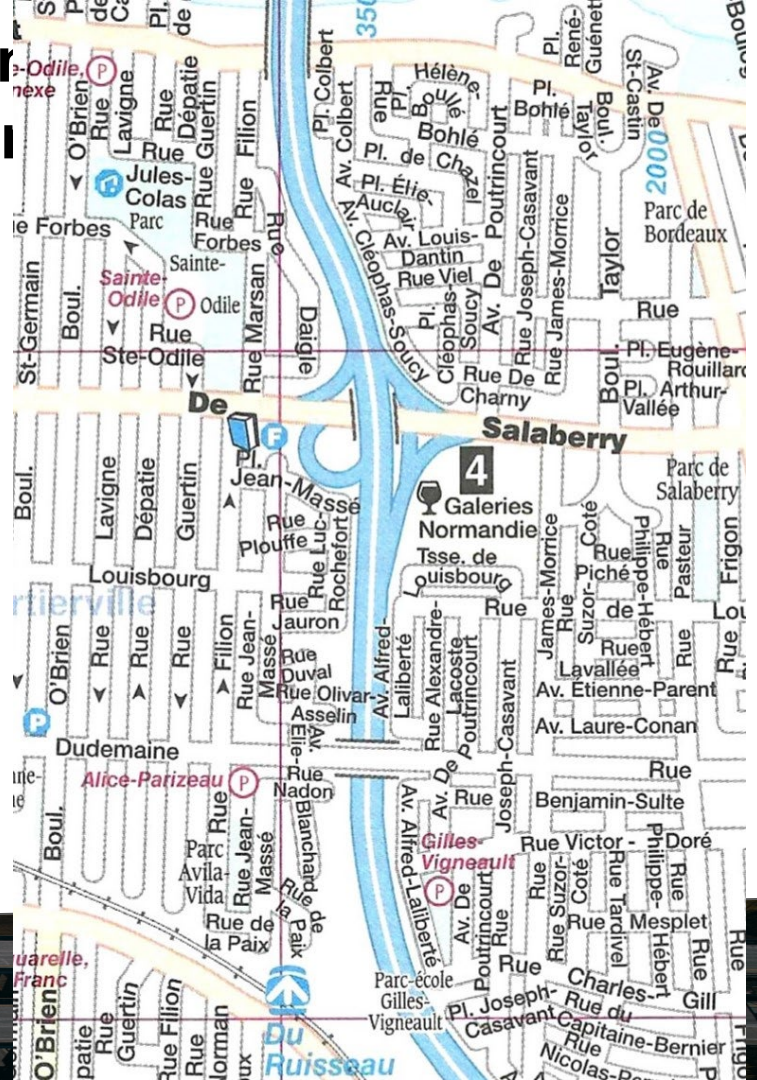
16. You are driving on Highway 40 westbound, is it possible for you to reach Chemin St-François directly via Boulevard Poirier ?

Answer: **False**



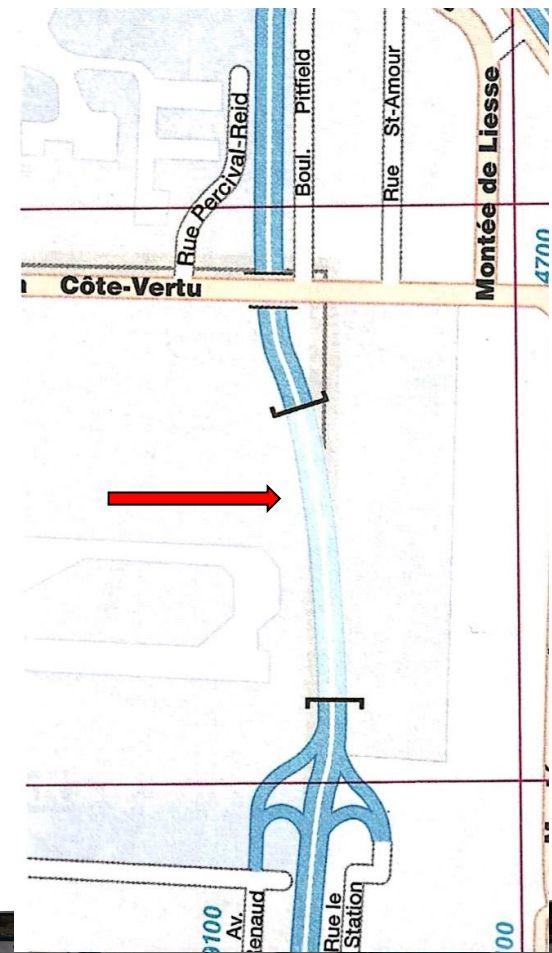
17. In the Cartierville borough, we find several streets that run parallel to Highway 15. Which of these streets is the widest?

Answer: **Dudemaine**



18. What does the shaded part of Highway 13 mean, between Côte-Vertu Boulevard and Côte-de-Liesse Road ?

Answer: **Tunnel sous l'aéroport**





19. In Montreal, which boulevard intersects with 9600 Boulevard Pie-IX ?

Answer : **Bl. industriel**



20. What do the arrows on Sanguinet Street in Montreal represent ?

Réponse: **One-way**

418

numero de sortie a autorc  
Interchange Number

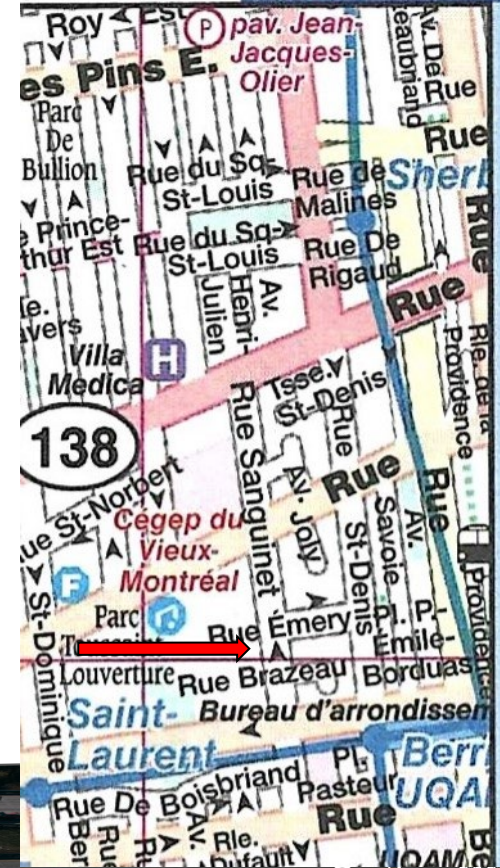


Rue à sens unique  
One Way Street

Numéro dans la voie

tréat

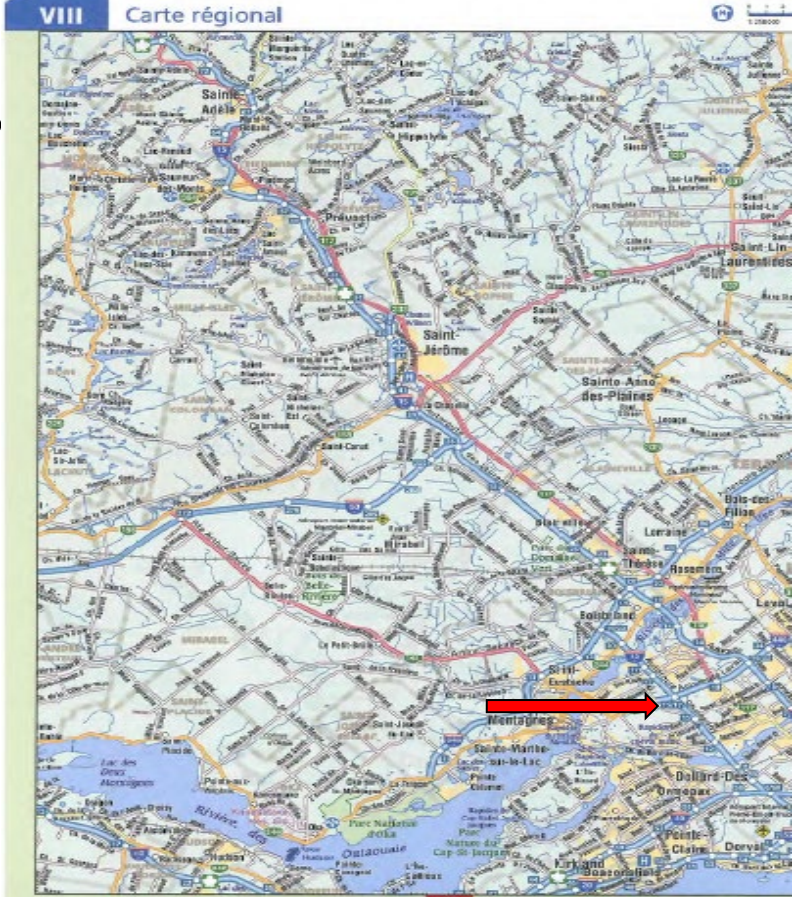
91





21. You are driving on Highway 13, heading south. Is east to your left?

Answer : **True**





## 22. What are the main advantages of using Google Maps Street View?

**Answer :**

1. **Make sure I arrive on the correct side of the road**
2. **Find landmarks for orientation**
3. **Visualize where the loading docks are located**



23. Using an electronic device, find the name of the gas station located at the corner of Golf Boulevard and Metropolitan Boulevard East in Montreal ?

Answer: **Pétro-Canada**



24-Using your electronic map, mention the truck brand provided by the dealership located at the corner of Sidbec N. Street and Saint-Joseph Street in Trois-Rivières, QC

Answer: **Mack**





25. Using your electronic map, find the height of the overpass on Route 117 North, at the corner of Henri-Bourassa Boulevard West, in Montreal, QC.

Answer : **3,95 metres**





## 26. Starting point:

Brasserie Labatt Ltee, 1045 Rue Léo-Fournier, Val-d'Or, QC

## Destination:

Brasserie Labatt Ltée, 50 Av. Labatt, LaSalle, QC

Determine the driving time without taking into account traffic congestion for this exercise.

**Answer:  $523 \text{ km} \div 80 \text{ km/h} = 6.53$**

**$.53 \times 60 \text{ (Minutes)} \div 100 = 31.8 \text{ soit } 32 \text{ minutes}$**





**27. According to the Rand McNally on the Map Legend page,**

**1 kilometer = 0.621 mile,**

**1 mile = 1.609 km**

Determine how many kilometers you will travel if you drive 525 miles.

**Answer:  $1.609 \times 525 = 844,7$  km**



# Lesson Plan 6.09 - Planning Urban Trips

(No questionnaire)

Recovery as needed



**Good job!!**

